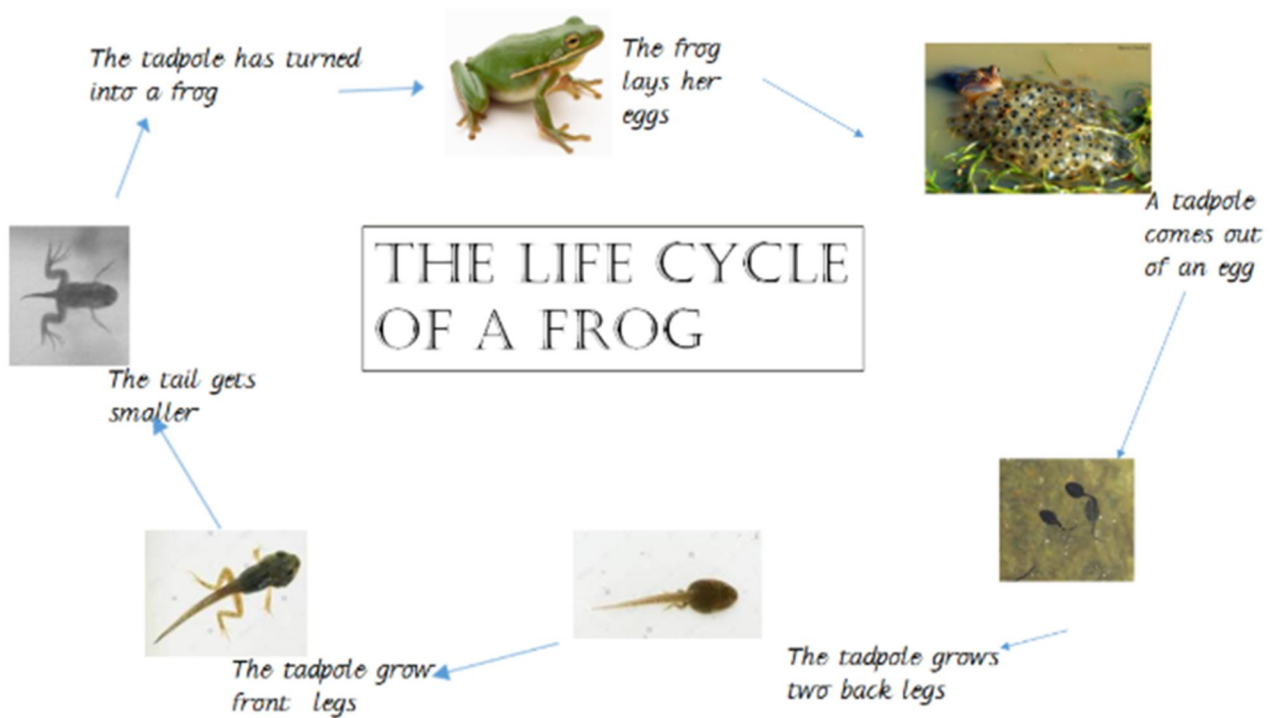


## Welcome to Year 1 Home Learning Page

Good morning. Thank you for sending your work and lovely pictures. You might just see them on the website. Today is another sunny but windy day. You have some reading to do about the life cycle of a frog. I wonder if you've been lucky enough to see frog spawn or tadpoles this year. Please send photographs to us, with a sentence telling us all about it, if you have.

### Writing and reading



Answer these questions

What does the frog lay?

Does the frog lay just one egg?

What comes out of the egg?

When it comes out of the egg does the tadpole have any legs?

Does the tadpole grow front legs or back legs first?

How many legs does the tadpole grow?

Does the tadpole still have a tail when it grows its front legs?

What does a tadpole turn into?




See what else you can find out about the life of a frog

## Maths

We are looking at multiples today. Watch this clip to remind you what that means.

<https://www.bbc.co.uk/bitesize/topics/zqbg87h/articles/zgbpnbk>

Use the key below to complete the activity.

- On every multiple of 2, draw a sun. 
- On every multiple of 5, put a cross on the square. 
- On every multiple of 10, colour the square blue. 

1	2	3	4	5	6	7	8	9	10
11	12	13	14	15	16	17	18	19	20
21	22	23	24	25	26	27	28	29	30
31	32	33	34	35	36	37	38	39	40
41	42	43	44	45	46	47	48	49	50
51	52	53	54	55	56	57	58	59	60
61	62	63	64	65	66	67	68	69	70
71	72	73	74	75	76	77	78	79	80
81	82	83	84	85	86	87	88	89	90
91	92	93	94	95	96	97	98	99	100

What do you notice about the numbers?

### Challenge

Which of these numbers are multiples of 2?



Write two multiples of 2 that are greater than 100.

\_\_\_\_\_

Which of these numbers are multiples of 5?



Write two multiples of 5 that are greater than 150.

\_\_\_\_\_

Which of these numbers are multiples of 10?



Write two multiples of 10 that are greater than 200.

\_\_\_\_\_



I saw this and thought of Year 1 and their love of Lego. We would love to see any photos.

Finally, Lulu and Humphrey are still keeping busy.



Humphrey is examining the globe. I wonder if he has found out where we live yet.



Lulu is in the garden with the gnome. They are really enjoying being outside in the sunshine.

Have a lovely day. Remember if you want to ask or suggest something, please contact us on [admin@cavalryprimaryschool.org](mailto:admin@cavalryprimaryschool.org) and put FAO of Mrs Turrell or Mrs Morris. We will get back to you as soon as we can.

Mrs Morris and Mrs Turrell 22.4.20

