

Good morning

We hope you had a good weekend. Did you celebrate VE Day?

Did you know that Saturday was odd sock day! A strange day but it's all about those socks that just disappear.

### English

Read this story - Simon's sock

<https://www.youtube.com/watch?v=IF-EHOTLRyU>

Write a story about your lost sock - what adventure would he have? Who would he be friends with?

Or draw a picture of your lost sock and describe it.

### Phonics

Don't forget to catch the phonics lessons

[https://www.youtube.com/channel/UCP\\_FbjYUP\\_UtldV2K\\_-niWw/videos?app=desktop](https://www.youtube.com/channel/UCP_FbjYUP_UtldV2K_-niWw/videos?app=desktop)

Lessons are uploaded at: Reception 10.00, Year 1 10.30, and blending 11.00.

### Fen landscape

Watch this clip to show you how to make a fen landscape. The Fens are very flat and you can see fields for a long distance. You can make a landscape and vegetables. If you want to carry on you can make a tractor and a windpump.

[https://www.facebook.com/ElyMuseum/videos/3010634039001086/?\\_tn=%2Cd%2CP-R&eid=ARDWXkzDoAQr84WFAeEYhefxZSlXqZValnRuzc98ciX6HSZpo9kereaXYZVqoe cPZyFlb6o617na-1Ry](https://www.facebook.com/ElyMuseum/videos/3010634039001086/?_tn=%2Cd%2CP-R&eid=ARDWXkzDoAQr84WFAeEYhefxZSlXqZValnRuzc98ciX6HSZpo9kereaXYZVqoe cPZyFlb6o617na-1Ry)

Remember to send photographs to [admin@cavalryprimary](mailto:admin@cavalryprimary)

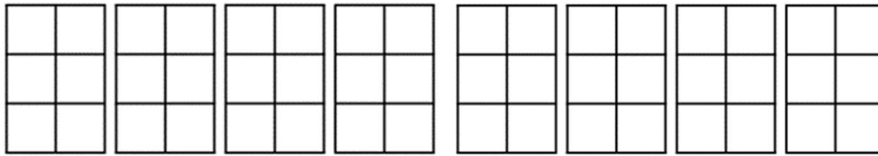
For those of you that are enjoying cooking on lockdown, I've found a recipe for chocolate and beetroot cake. Looks lovely

<http://www.lovebeetroot.co.uk/our-ultimate-beetroot-chocolate-cake/>

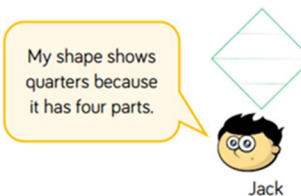
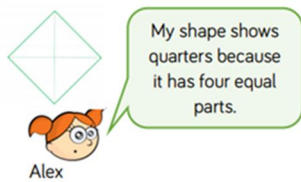
## Maths

Here are some challenges all to do with fractions. Which ones can you do? Draw and use counters if you want to.

Draw these shapes. How many different ways can you shade one half of the shape?  
Remember there are 6 squares - what is half of 6?



Can you work out this problem?  
Alex and Jack are talking about quarters



Or this problem?

In the first square, show less than a quarter shaded.

In the next square, show exactly a quarter shaded.

On the last square, show more than a quarter shaded



Are they correct? Explain your answer.

This is a bit trickier - use counters or draw the hoops to help you.

Mr White has asked his class to put one quarter of the balls into the hoop.



Who is correct? Can you explain any mistakes made?



Humphrey has been busy building. I think he would like a friend to help.

Lulu has been watching Mrs Morris make uniform bags on her sewing machine.



Have a lovely day and keep sending those photographs of your fabulous work.

Mrs Morris and Mrs Turrell

11<sup>th</sup> May 2020